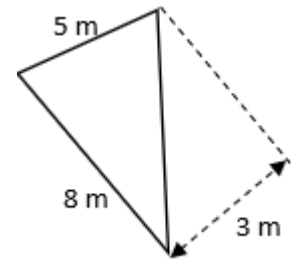
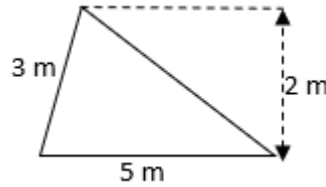
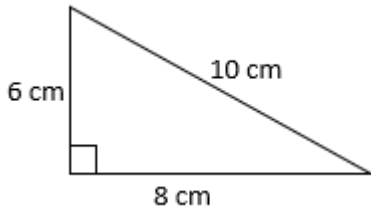


Year 6 Maths Homework

Due in Friday 15th March

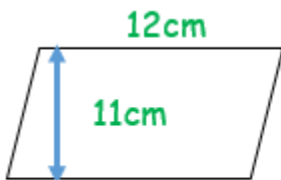
Area of Triangles

Calculate the area of these triangles. You will need to research the formula if you have forgotten it!



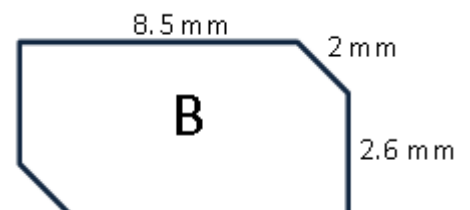
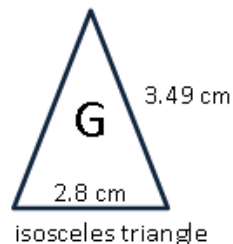
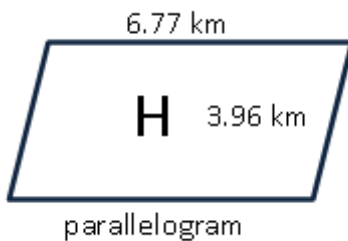
Area of Parallelograms

Calculate the area of these parallelograms. You will need to research the formula if you have forgotten it!



Perimeter of Polygons

Calculate the perimeter of these polygons. You will need to use the information you have been given to find any unlabelled edges.



Volume of Cuboids

Calculate the volume of these cuboids. You will need to research the formula if you have forgotten it!

