




# Converting Between Digital and Analogue Clock Times

I can convert between digital and analogue clock times.



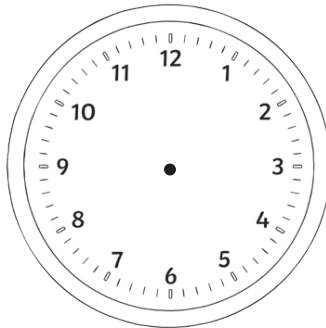
1. Draw these past-the-hour digital times on to the analogue clocks and write the time in numbers and words underneath. The first one has been done for you:

a) 6:13

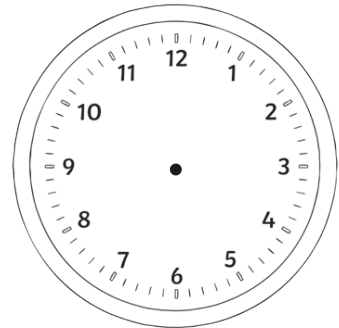


13 minutes past 6

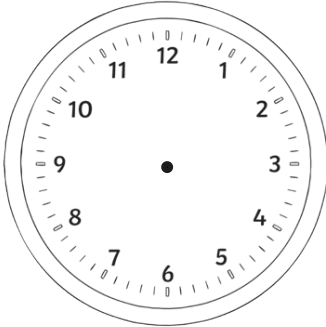
b) 9:24



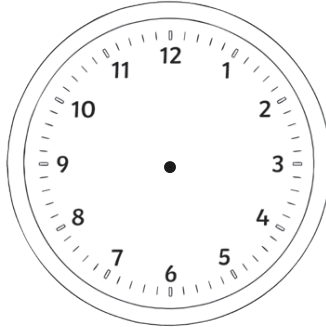
c) 7:09



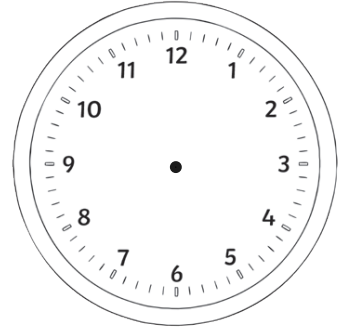
d) 2:17



e) 3:29



f) 8:22

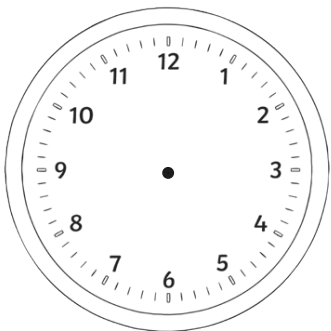




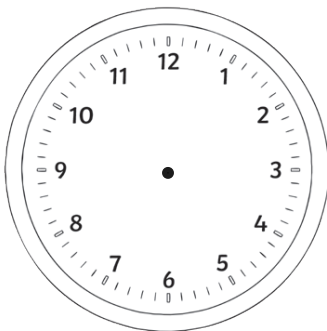
## Converting Between Digital and Analogue Clock Times

2. Draw these past-the-hour digital times on to the analogue clocks and write the time in numbers and words underneath.

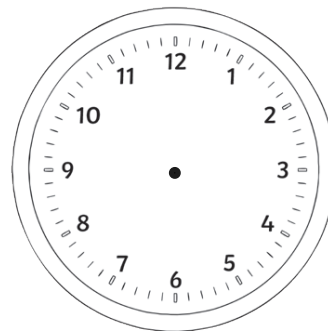
a) 9:44



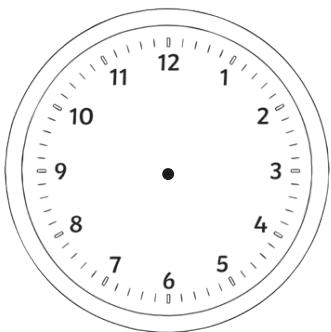
b) 8:56



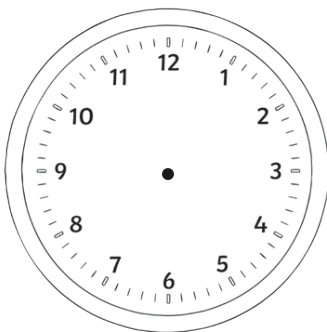
c) 3:49



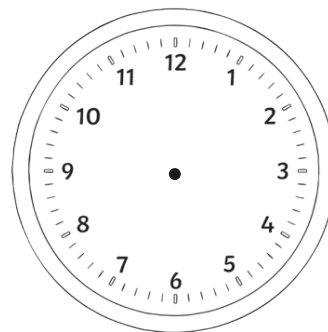
d) 5:32



e) 1:53

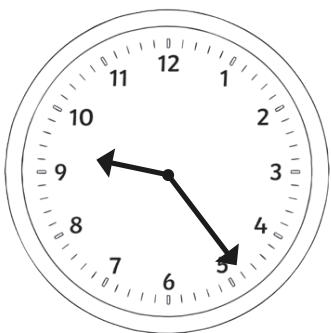


f) 10:38




3. Write the digital times for these past-the-hour analogue clocks.

a)



b)



c)

