

Athena-Kae's Acrostic Poem

W
I
N
T
E
R
I
S
C
O
L
D
B
U
T
I
L
O
V
E
C
H
R
I
S
T
M
A
S.
I
C
Y
C
O
L
D
N
O
H
E
A
T
O
U
T
S
I
D
E
U
N
T
I
L
S
P
R
I
N
G.
T
R
E
E
S
L
O
S
E
L
E
A
V
E
S
A
N
D
W
E
A
R
W
H
I
T
E
S
N
O
W.
E
V
E
R
Y
D
A
Y
I
L
O
O
K
O
U
T
S
I
D
E
W
A
I
T
I
N
G
F
O
R
S
N
O
W.
R
E
A
D
Y
F
O
R
S
U
M
M
E
R
T
O
E
N
J
O
Y
T
H
E
H
E
A
T
O
U
T
D
O
O
R
S.

Dakota's Acrostic Poem

F
R
E
E
Z
I
N
G
I
C
E
O
N
T
H
E
G
R
O
U
N
D.
R
U
N
N
I
N
G
A
R
O
U
N
D
T
O
G
E
T
W
A
R
M.
O
F
T
E
N
M
E
A
S
U
R
I
N
G
A
H
I
C
A
N
D
W
A
R
M
S
C
O
F
F
L
E.
S
I
P
P
I
N
G
H
O
T
C
H
O
C
O
L
A
T
E
W
I
T
H
C
O
R
O
N
E
L.
T
O
A
S
T
I
N
G
M
A
R
S
H
M
A
L
L
S
O
N
T
H
E
F
I
R
E.

Heath's Maths Work



Felix's Maths Work



Tobias' Maths Work

5cm
 4cm 4cm $p=22\text{cm}$
 9cm

15 shared into 3 groups is 5 in each group.
 $15 \div 3 = 5$

20 shared into 4 groups is 5 in each group.
 $20 \div 4 = 5$

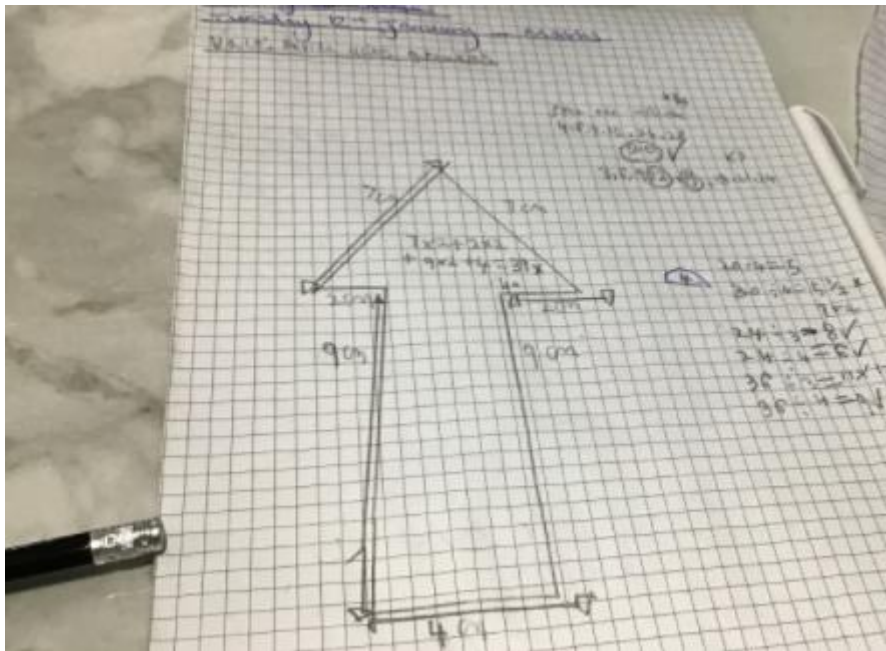
$24 \div 4 = 6$
 $24 \div 6 = 4$

there are 18 grapes and 3 people how many grapes do they each get?

Aarav's Maths Work

1. $24 \div 3 = 8$
 2. $24 \div 4 = 6$
 3. $36 \div 3 = 12$ 00000000000000
 4. $36 \div 4 = 9$ 0000000000
 5. $22 \div 3 = 7 \text{ r } 1$ 0000000
 6. $19 \div 4 = 4 \text{ r } 3$ 0000
 7. $31 \div 3 = 10 \text{ r } 1$ 0000000000
 8. $42 \div 5 = 8 \text{ r } 2$ 00000000

Kobi's Maths Work




Elias' Maths Work


19 ÷ 4 = 4 r 3
4 8 12 16 20 ooo|ooooo|ooooo|ooooo

31 ÷ 3 = 10 r 1

42 ÷ 5 = 8 r 2

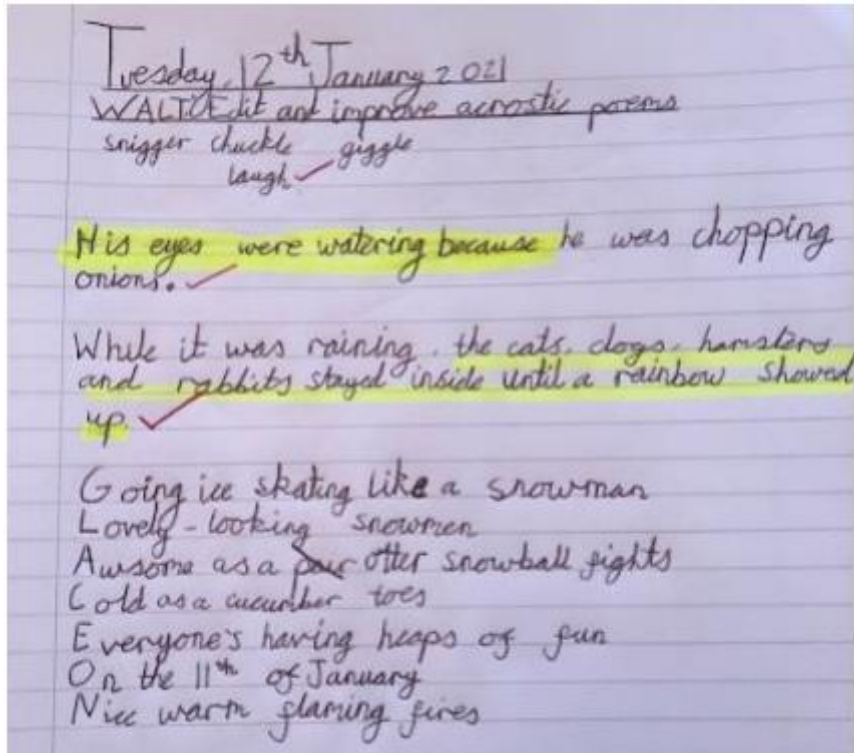
3 $24 \div 4 = 6$ TAX


A taxi can hold a maximum of 4 passengers. How many taxis are needed for 24 passengers?

4 $30 \div 4 = 7$ r 2


Pencils come in packs of 4.
How many packs will be needed for a class of 30 children?

Edie's English Work



Jasper's Maths Work

